

Name 000120741 Index Number /

443/2
AGRICULTURE
Paper 2
(THEORY)
Oct./Nov. 2015
2 hours

Candidate's Signature

Date



THE KENYA NATIONAL EXAMINATIONS COUNCIL

04500202

Kenya Certificate of Secondary Education

AGRICULTURE

Paper 2

(THEORY)

2 hours

Instructions to candidates

- (a) Write your name and index number in the spaces provided above.
- (b) Sign and write the date of examination in the spaces provided above.
- (c) This paper consists of **three** sections; **A, B** and **C**.
- (d) Answer **all** the questions in sections **A** and **B** and any **two** questions in section **C**.
- (e) **All** answers should be written in the spaces provided on the question paper.
- (f) **This paper consists of 16 printed pages.**
- (g) **Candidates should check the question paper to ascertain that all the pages are printed as indicated and that no questions are missing.**
- (h) **Candidates should answer the questions in English.**

For Examiner's Use Only

Section	Question	Maximum Score	Candidate's Score
A	1 – 18	30	
B	19 – 22	20	
C		20	
		20	
Total Score		90	



915047

© 2015 The Kenya National Examinations Council



Turn over

SECTION A (30 marks)

Answer ALL the questions in this section in the spaces provided.

1 Name **four** rabbit breeds reared in Kenya. (2 marks)

.....
.....
.....
.....

2 State **four** characteristics of desirable eggs for marketing. (2 marks)

.....
.....
.....
.....

3 Name **two** types of roughage. (1 mark)

.....
.....

4 Give **four** disadvantages of inbreeding in livestock. (2 marks)

.....
.....
.....
.....

5 Name the nutritional deficiency for each of the following livestock diseases:

- (a) milk fever; ($\frac{1}{2}$ mark)
- (b) bloat. ($\frac{1}{2}$ mark)

6 Give **two** reasons for docking in sheep rearing. (1 mark)

.....
.....

7 State **four** signs of fowl typhoid. (2 marks)

.....
.....
.....
.....

8 Differentiate between drift and pen lambing. (2 marks)

.....
.....
.....
.....

9 State **four** features on the animal which may predispose it to livestock diseases. (2 marks)

.....
.....
.....
.....

10 Give **four** factors that affect milk composition. (2 marks)

.....
.....
.....
.....

11 State **two** control measures for keds in sheep. (1 mark)

.....
.....

12 State **two** maintenance practices carried out on a greenhouse structure. (1 mark)

.....
.....

13 (a) Name the goat breed which is brown in colour with white strips running down the face to the nose. ($\frac{1}{2}$ mark)

.....

(b) State **four** rearing practices that necessitate handling of piglets. (2 marks)

.....
.....
.....
.....

14 Give **four** preventive measures for livestock diseases. (2 marks)

.....
.....
.....
.....

15 State **one** function of each of the following parts during egg formation in poultry:

(a) funnel; ($\frac{1}{2}$ mark)

.....
.....

(b) magnum; (1/2 mark)

.....
.....

(c) isthmus. (1/2 mark)

.....
.....

16 The following is a list of poultry breeds:

- White Leghorn
- Light Sussex
- Rhode Island Red
- Ancona.

Categorize them into:

(a) light breeds; (1 mark)

.....

(b) heavy breeds. (1 mark)

.....

17 State two functions of a queen in a bee colony. (1 mark)

.....
.....

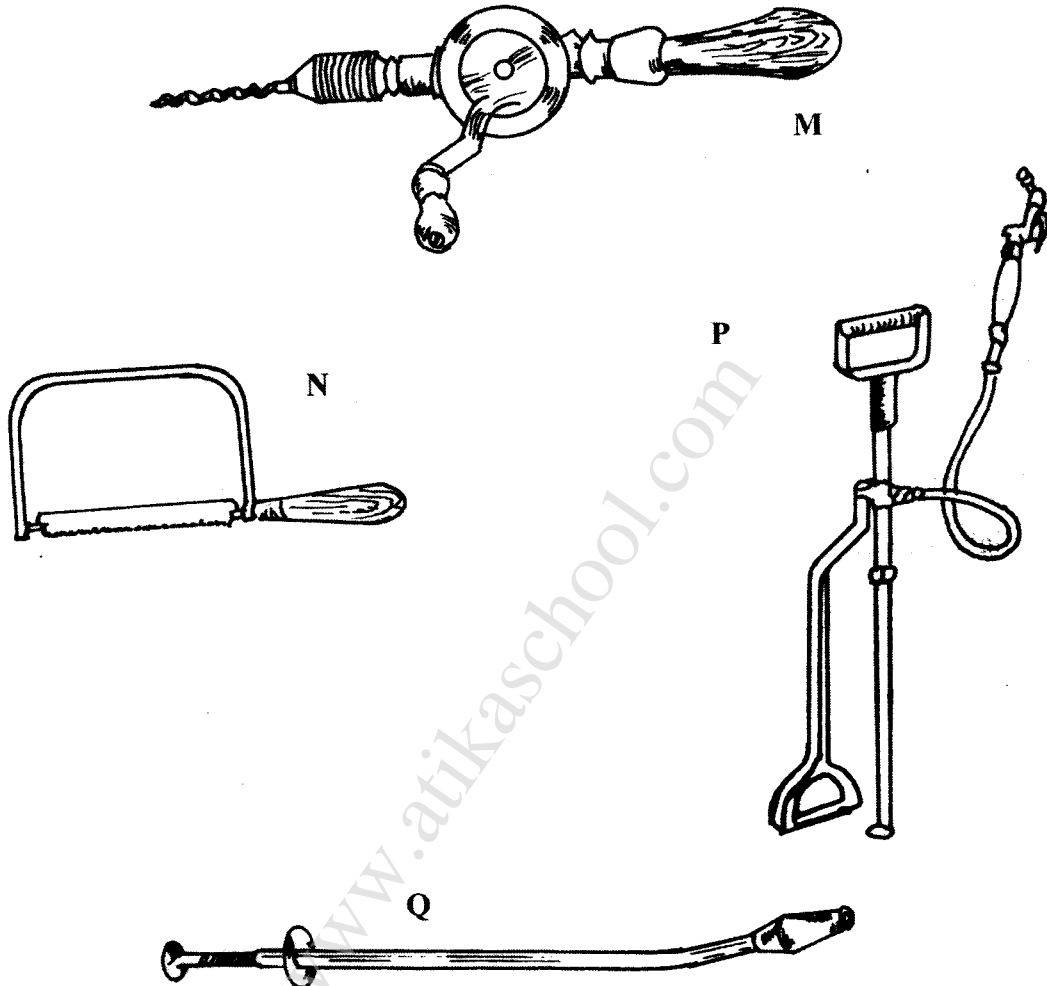
18 State four maintenance practices carried out on a fish pond. (2 marks)

.....
.....
.....
.....

SECTION B: (20 marks)

Answer ALL the questions in this section in the spaces provided.

- 19 The diagrams below represent some farm tools and equipment. Study them and answer the questions that follow.



- (a) Identify the tools labelled N and P.

N (1 mark)

P (1 mark)

- (b) State **one** use of each of the tools labelled M and Q.

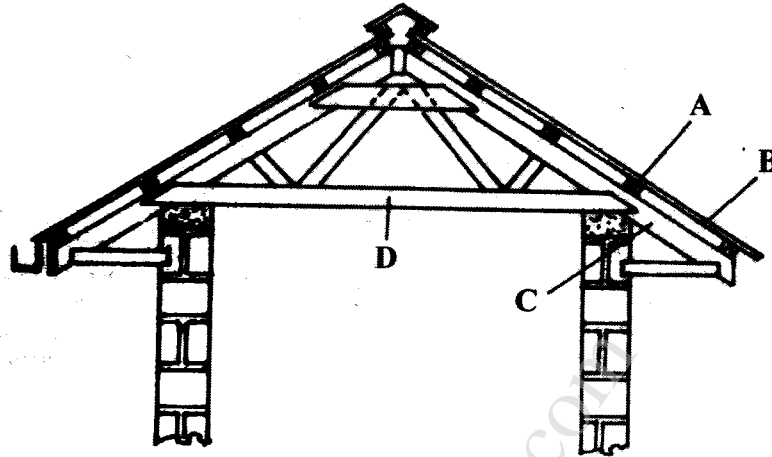
M (1 mark)

Q (1 mark)

- (c) Explain **one** maintenance practice carried out on the equipment labelled P. (1 mark)

.....
.....


20 The diagram below represents parts of a roof.



- (a) Identify the parts labelled A and C. (1 mark)
- A (1 mark)
- C (1 mark)
- (b) State **two** types of materials that may be used for the part labelled D. (2 marks)
-
-
- (c) Give **one** disadvantage of using thatch for the part labelled B. (1 mark)

.....
.....

21 The diagram below illustrates an internal parasite of livestock.



(a) Identify the parasite. (1 mark)

.....

(b) Name **two** common species of the parasite illustrated above. (2 marks)

.....

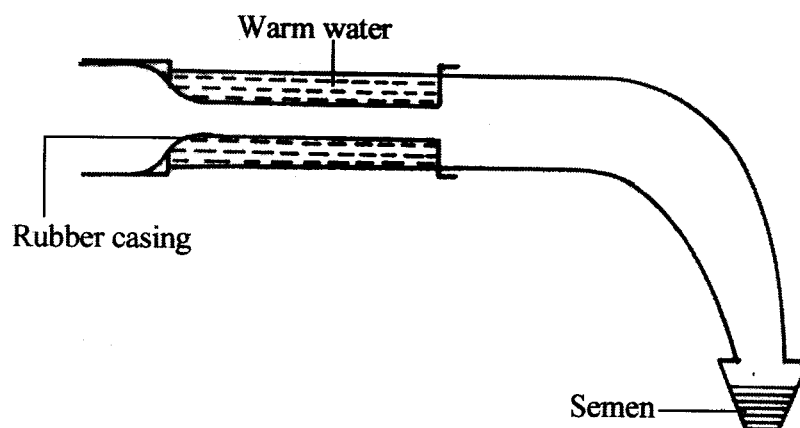
.....

(c) State **two** signs of worm infestation that may be observed in the dung of livestock. (2 marks)

.....

.....

- 22 Below is a diagram illustrating an instrument used in cattle breeding.



- (a) Identify the instrument. (1 mark)
-
- (b) State the role of the instrument in cattle breeding. (1 mark)
-
- (c) When would it be appropriate to serve a cow after the onset of heat? (1 mark)
-
- (d) Apart from the method in which the above instrument is used, name two other methods of serving a cow. (2 marks)
-
-

SECTION C: (40 marks)

Answer any TWO questions from this section in the spaces provided after question 25.

- 23 (a) Give the functions of any **five** parts of a poultry egg. (10 marks)
- (b) Describe the uses of **five** materials/equipment required for hand milking. (10 marks)
- 24 (a) Describe East Coast fever under the following sub-headings:
 - (i) livestock affected; (1 mark)
 - (ii) vector and causal organism; (2 marks)
 - (iii) signs of attack; (5 marks)
 - (iv) control measures. (2 marks)
- (b) Describe the activities that take place during the digestion process in the rumen. (5 marks)
- (c) Describe the management practices that ensure proper hygiene in a deep litter poultry house. (5 marks)
- 25 (a) State **five** signs of external parasite infestation in livestock. (5 marks)
- (b) Explain **five** factors that should be considered when siting a farm store. (5 marks)
- (c) Describe the cycle of a four stroke petrol engine. (10 marks)

.....

.....

.....

.....

.....

.....

.....

.....

.....

.....

.....